



Naming Quadrilaterals

Quadrilaterals are polygons with four edges (sides), four vertices (corners).
Choose the word from the word bank and write the correct name of each quadrilateral.


Kite




Rhombus



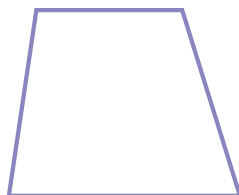
Trapezoid



Rectangle



Square



Parallelogram

