


Name:

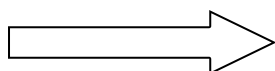
Date:

LO: We are learning that the Romans built towns across Britain.

Look at the map showing ancient Roman towns. Use a map of England to find out the modern names of the ancient Roman towns. Write the modern names below.




Eboracum




\_\_\_\_\_

Lindum




\_\_\_\_\_

Deva



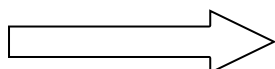
\_\_\_\_\_

Aquae Sulis




\_\_\_\_\_

Venonis




\_\_\_\_\_

Verulamium



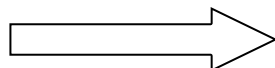
\_\_\_\_\_

Londinium




\_\_\_\_\_

Dubris




\_\_\_\_\_

Durnovaria



\_\_\_\_\_

Isca



\_\_\_\_\_

Explain how you found the modern names for these ancient Roman towns:

---



---