


Q1



a

Declan spins the spinner twice and multiplies his two digits together. He gets the answer 0.

Which digit must one of his digits have been?

1 mark

b

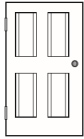


Katie spins the spinner twice and multiplies her two digits together. She doesn't land on a 0 either time. Her answer is the same as one of her digits.

Which digit must one of the digits have been?

1 mark

Q2

Circle the best estimate for each measurement.

Measurement	Estimate		
 the height of a door	3 metres	2 metres	1 metre
 the mass of an apple	500g	100g	1,000g
 the capacity of a can of lemonade	30ml	3,000ml	300ml

1 mark

Q3

Complete these sentences with the words **always**, **sometimes** or **never**.

Multiples of 7 are \_\_\_\_\_ even.

Multiples of 12 are \_\_\_\_\_ odd.

Multiples of 12 are \_\_\_\_\_ multiples of 3.

2 marks