

Diving into Mastery



Comparison, Sum and Difference

twinkl

Aim

- Solve comparison, sum and difference problems using information presented in bar charts, pictograms, tables and other graphs.



Today we are going to be looking at the same charts as we did on Tuesday and Wednesday but we will be thinking about solving some different problems.

Remember

R – read the question carefully

U – understand the question. What is it asking you to do?

C – choose how you are going to work it out


S – solve the problem making sure to follow any steps

A – answer the question. Do you need to write it in a specific way or in a specific box?

C – check your answer. Could you use the inverse operation to check? Or just re-read the question and check your calculations.



King or Queen	Length of Reign to Nearest Whole Year
Edward VII	9
George V	26
Edward VIII	1
George VI	15






















How much longer did Edward VII rule than Edward VIII?

8 years

What is the sum of the length of reigns by kings named George?

41



King or Queen	Length of reign  = 2 years
Aethelstan	      
Edmund I	   
Eadred	    
Eadwig	 

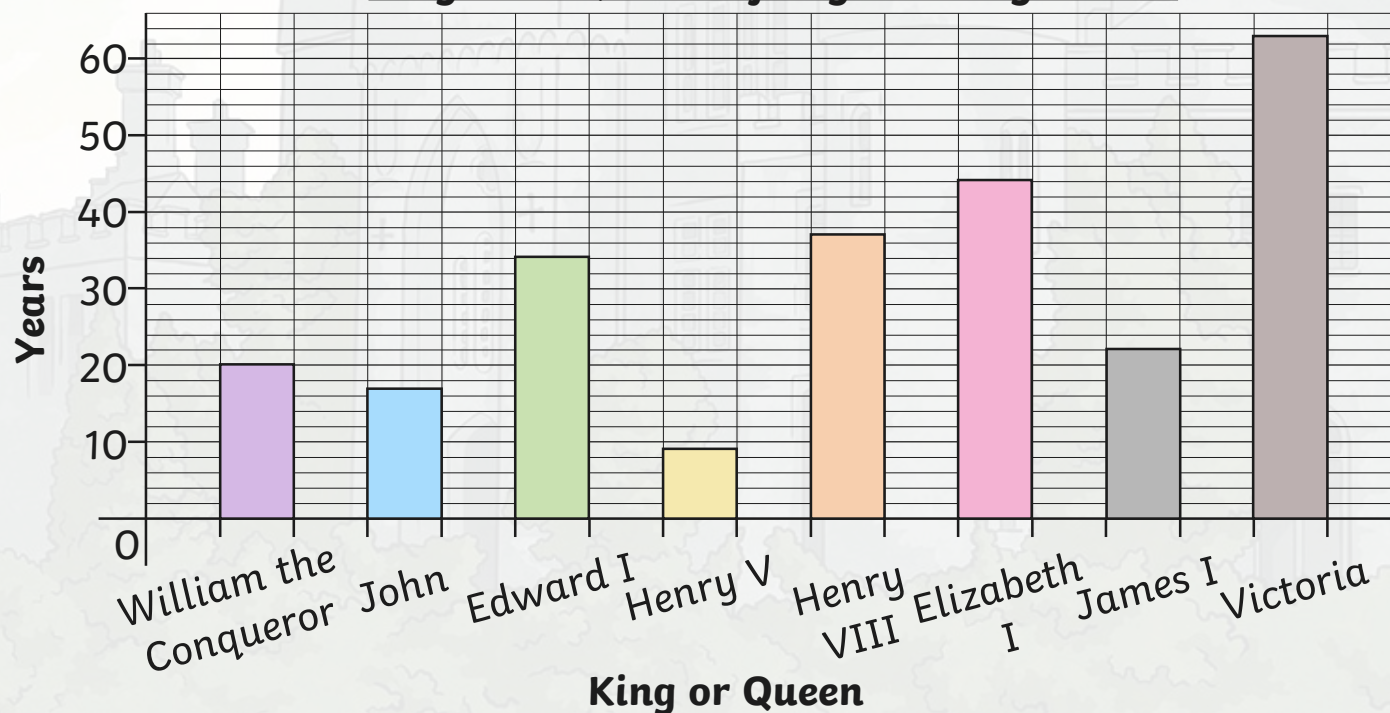
Edmund I ruled for half the time of Aethelstan. How would we show this on the pictogram?

What is the difference between the longest and shortest reign shown?

10 years



**A Bar Chart to Show How Many Years Significant
Kings and Queens of England Reigned For**



True or False? Victoria ruled for more than twice as long as Henry VIII.

False