





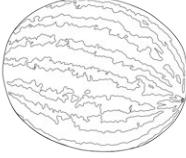




Compare the Fruit

I can calculate the total combined mass and difference of several items.



						
blueberry 5g	strawberry 10g	apricot 30g	apple 80g	peach 100g	banana 150g	melon 2kg

1) Use the correct symbol (<, > or =) to compare these items:

2 strawberries and 1 banana		1 peach and 4 blueberries
5 blueberries and 3 apricots		2 apples and 1 banana
6 blueberries and 1 apricot		1 apple and 1 strawberry

2) Calculate the difference in mass:

a) Between an apple and a banana.

b) Between a banana and 4 strawberries.

c) Between 3 apricots and a peach.



Compare the Fruit **Answers**

I can calculate the total combined mass and difference of several items.



- 1) Use the correct symbol ($<$, $>$ or $=$) to compare these items:

2 strawberries and 1 banana	$>$	1 peach and 4 blueberries
5 blueberries and 3 apricots	$<$	2 apples and 1 banana
6 blueberries and 1 apricot	$<$	1 apple and 1 strawberry

- 2) Calculate the difference in mass:

a) Between an apple and a banana.

70g

b) Between a banana and 4 strawberries.

110g

c) Between 3 apricots and a peach.

10g