

Varied Fluency – Pounds and Pence

National Curriculum Objectives:

Mathematics Year 4: (4M1) [Compare different measures including money in pounds and pence](#)

Mathematics Year 4: (4M2) [Estimate different measures including money in pounds and pence](#)

Mathematics Year 4: (4M9) [Calculate different measures including money in pounds and pence](#)

Mathematics Year 4: (4F10b) [Solve simple measure and money problems involving fractions and decimals to two decimal places](#)

Differentiation:

Developing Questions to support writing money as £ and p.

Expected Questions to support writing money as £ and p and converting money from pounds and pence to £ and p.

Greater Depth Questions to support writing money as £ and p and converting money from pounds and pence to £ and p including occasions where there is more than 100 pence.

[More resources](#) which follow the same small steps as White Rose.

Did you like this resource? Don't forget to [review](#) it on our website.

Varied Fluency – Pounds and Pence

1a. Complete the table.

£	p	£ and p
3	30	£3.30
2	95	
1	50	



VF


1b. Complete the table.

£	p	£ and p
1	42	£1.42
2	59	
5		£5.23



VF

2a. How much money is in each jar?



VF

2b. How much money is in each jar?



VF

3a. I have a pound coin, a fifty pence coin and a five pence coin. How much money do I have altogether?



VF

3b. I have a pound coin, a twenty pence coin and a two pence coin. How much money do I have altogether?



VF

4a. Which is the correct written version of the coins shown?



- A) £1.52
B) £1.25
C) £152



VF

4b. Which is the correct written version of the coins shown?



- A) £1.01
B) £110
C) £1.10



VF

5a. What is the value of the underlined digit?

- a) £1.55 b) £2.60 c) £2.90



VF

5b. What is the value of the underlined digit?

- a) £1.55 b) £2.60 c) £2.90



VF

Varied Fluency – Pounds and Pence

6a. Complete the table.

£	p	£ and p
2		£2.55
6	61	
		£8.23



VF


6b. Complete the table.

£	p	£ and p
2	99	
2	15	
		£6.10




VF

7a. How much money is in each jar?



VF

7b. How much money is in each jar?



VF

8a. I have two pound coins, a fifty pence coin and 2 five pence coins. How much money do I have altogether?




VF

8b. I have a pound coin, a twenty pence coin and 2 ten pence coins. How much money do I have altogether?



VF

9a. Which is the correct written version of the coins shown?



- A) £1.2
- B) £1.20
- C) £1.02



VF

9b. Which is the correct written version of the money shown?



- A) £6.01
- B) £6.10
- C) £610



VF

10a. What is the value of the underlined digit?

- a) £10.15
- b) £2.06
- c) £12.93



VF

10b. What is the value of the underlined digit?

- a) £10.55
- b) £21.60
- c) £2.91



VF

Varied Fluency – Pounds and Pence

11a. Complete the table.

£	p	£ and p
3	130	£4.30
4	110	
1	115	



VF

11b. Complete the table.

£	p	£ and p
5	99	
2		£2.95
1	110	



VF

12a. How much money is in each jar?



VF

12b. How much money is in each jar?



VF

13a. I have a pound coin, 2 fifty pence coins and a twenty pence coin. How much money do I have altogether?



VF

13b. I have three pound coins, a fifty pence coin and 6 twenty pence coins. How much money do I have altogether?



VF

14a. Which is the correct written version of the amount of money shown?



VF

14b. Which is the correct written version of the amount of money shown?



VF

15a. What is the value of the underlined digit?

a) £30.65 b) £29.96 c) £121.93



VF

15b. What is the value of the underlined digit?

a) £10.05 b) £210.65 c) £12.99



VF

Varied Fluency – Pounds and Pence

Developing

- 1a. £2.95, £1.50
- 1b. £2.59, 23p
- 2a. £1.52, £1.12
- 2b. £1.51, £1.25
- 3a. £1.55
- 3b. £1.22
- 4a. A
- 4b. C
- 5a. £1, £2, 90p
- 5b. 50p, 60p, £2

Expected

- 6a. 55, £6.61, 8, 23
- 6b. £2.99, £2.15, 6, 10
- 7a. £1.85, £1.72
- 7b. £1.61, £1.80
- 8a. £2.60
- 8b. £1.40
- 9a. C
- 9b. B
- 10a. 10p, 6p, £10
- 10b. 50p, £1, 90p

Greater Depth

- 11a. £5.10, £2.15
- 11b. £5.99, 95, £2.10
- 12a. £10.61, £2.12
- 12b. £2.12, £10.10
- 13a. £2.20
- 13b. £4.70
- 14a. C
- 14b. B
- 15a. 60p, £9, £100
- 15b. 5p, £10, 90p