

1

Complete the sequences.

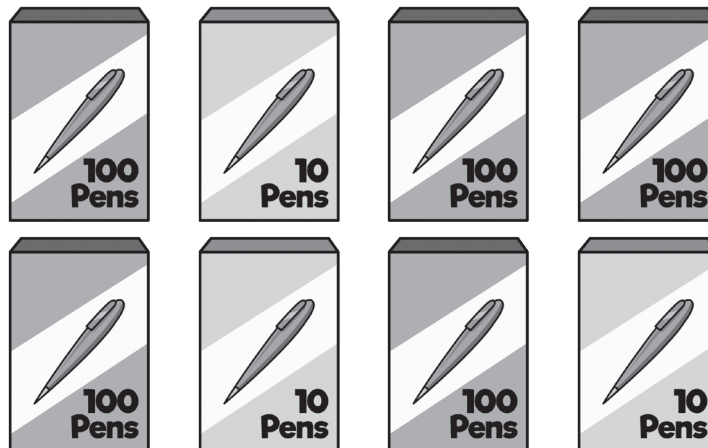
0	50	100			250	
---	----	-----	--	--	-----	--

44		36	32			20
----	--	----	----	--	--	----

2 marks

2

Pens are sold in boxes of 10 and boxes of 100

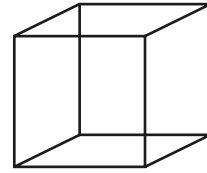
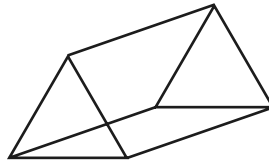
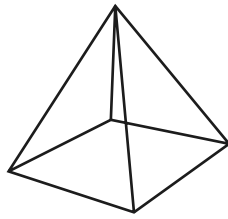


How many pens are there altogether?

1 mark

3

Circle the shape with 5 faces and 6 vertices.



1 mark

4

Use these words to complete the sentences.

days

minutes

hour

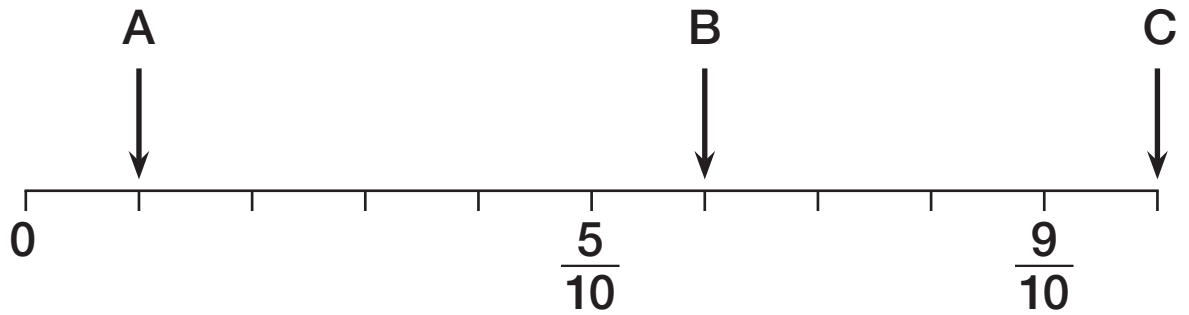
There are 60 _____ in an _____ .

There are 31 _____ in March.

1 mark

5


Complete the missing fractions.

 $A =$ $B =$ $C =$

2 marks




6

Circle the vertical line.



1 mark

Circle the parallel lines.



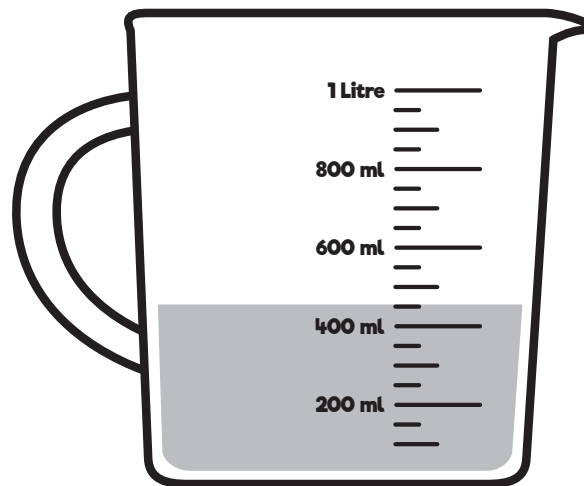
1 mark

Draw a line that is 5 cm long.

1 mark

7

Here is a jug of water.



How much water is in the jug?

 ml

1 mark


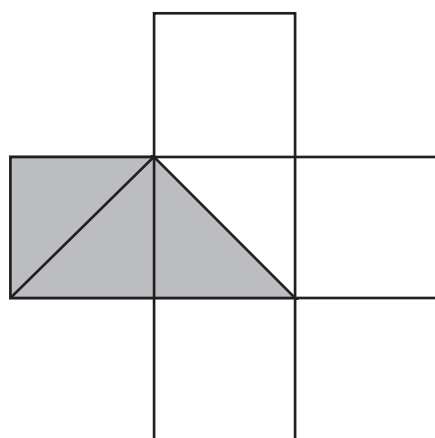

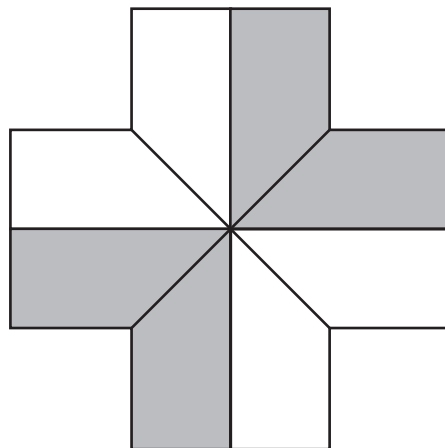

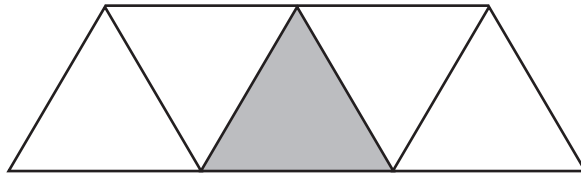
Steph uses 175 ml of the water.

How much water is left?

 ml

1 mark

What fraction of each shape is shaded?



3 marks