

Q1

Complete this multiplication table.

x	6	
7	42	56
	30	
	72	

2 marks

Q2

A number becomes 790,000 when rounded to the nearest 10,000.

a

What is the largest number that it could be?

1 mark

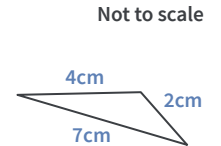
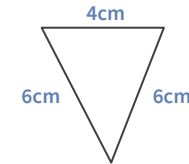
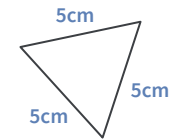
b

What is the smallest number that it could be?

1 mark

Q3

Match up each triangle with its correct name and property.


scalene
triangle

equilateral
triangle

isosceles
triangle

all sides the
same length

no sides the
same length

two sides the
same length

1 mark