




Match the times to the clocks showing the same time.

9 o'clock in the morning.		19:15
Half past 3 in the afternoon.		09:00
Quarter past 7 in the evening.		15:30

Is Ralph correct?
Prove it.



If the time has an 8 in it, it has to be 8 o'clock.

3

Complete the times.

13:45	Quarter to one in the _____.	__:15	Quarter past three in the afternoon.
11:20	Twenty past eleven in the _____.	17:__	Twenty five to six in the evening.
15:50	Ten to four in the _____.	__:__	Twenty to 9 in the morning.