


Look at the hands of the clock.

Turn the minute hand one quarter of a turn clockwise.

Where is the large hand pointing?

What is the new time?




The angle between the hands is called a _____ angle.

One quarter turn is equal to a _____ angle.


When two straight lines meet at a point, they make an _____.

Tick the images where you can see an angle.



True or False?

This shape has two right-angles.



Explain your answer.