

Harry leaves school at



He gets home at



How long does he take to get home?

minutes

Look at this clock.



What time will the clock show **two hours later**?



Tick (✓) it.



Sita's watch shows this time.


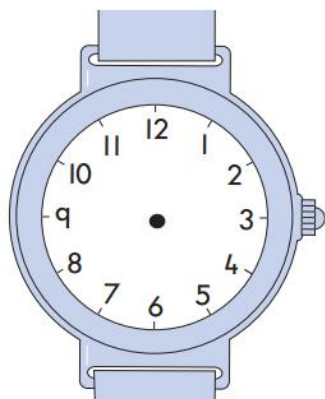



Draw a tick (✓) on the clock which shows **half past three**.



Harry's watch shows the same time.

Draw the hands on his watch.





The Fun Day started at this time in the morning.



It finished at this time in the afternoon.



How long did the Fun Day last?



hours

minutes

One clock shows a time between **3 o'clock** and **5 o'clock** in the same afternoon.

Tick (✓) it.

